



Review 1

Count and write the correct numbers.

[3 marks]

1.  _____ wheels

2.  _____ buses

3.  _____ bottles

Look at each picture carefully. Fill in the missing numbers in each number bond. [2 marks]

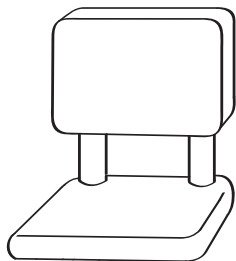
4.  

5.  


Draw to show the correct numbers.

[2 marks]

6. The chair has 4 legs.



7. There are 7 apples on the tree.




8. Match the numbers to make 6.

[4 marks]



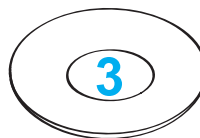
•



•



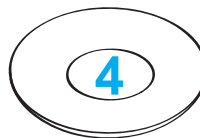
•



•



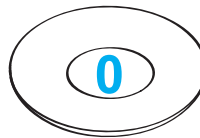
•



•




•





•

Count the number of objects and circle the correct word.

[3 marks]


9.  six ten eight nine

10.  five three four two

11.  seven six four eight


Fill in each blank with the correct word in the box.

[4 marks]

12. 
more fewer

There are _____ books than pencils.

There are _____ pencils than books.

13. 
ladybirds leaves

There are more _____ than _____.

There are fewer _____ than _____.

14. Circle the greater number.

[1 mark]

7

9

15. Circle the smaller number.

[1 mark]

3

5

16. Complete the number pattern.

[1 mark]

_____, _____, 7, 8, 9

17. 1 more than 9 is _____.

[1 mark]

Fill in the missing number in each number bond.

[3 marks]

