

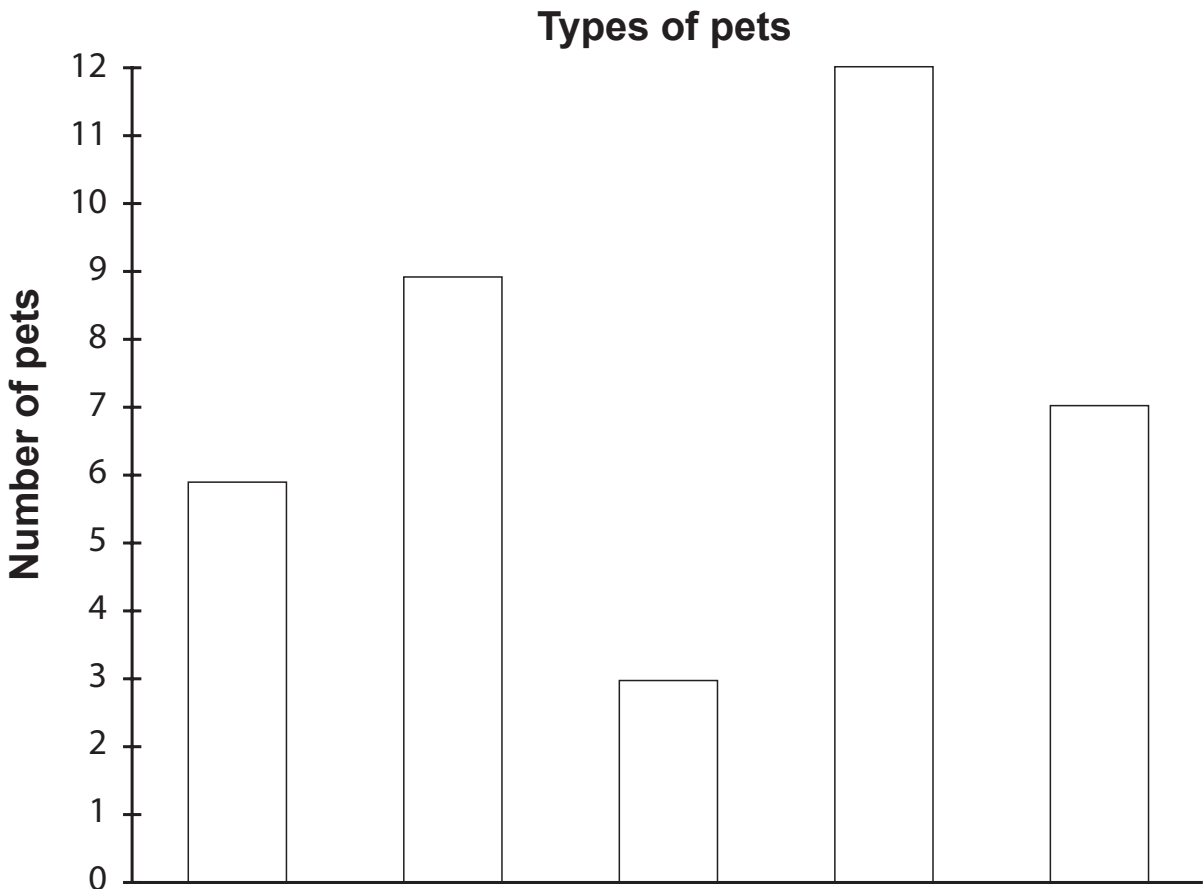
# Animal Pets

Sonia's class has collected information about pets.

Class members keep five different types of animals as pets. Below is a graph showing how many there are of each pet.


The names of the types of animals have not been put on the graph.

Cut out the animals' names on the next page and glue them onto the bars of the graph. Use the information given to help you.

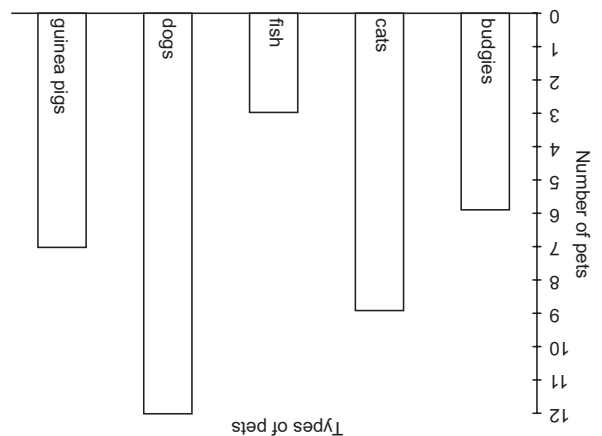


**Clues:**

- There are 3 fewer cats than dogs.
- The smallest number of pets kept are fish.
- The number of cats added to the number of fish is the same as the number of dogs.
- Most students have dogs as pets.
- There is one fewer budgie than guinea pigs.



cats	fish	budgies	guinea pigs	dogs
------	------	---------	-------------	------



**Answers:**